

R18

Code No: 156AZ

JAWAHARLAL NEHRU TECHNOLOGICAL UNIVERSITY HYDERABAD

B. Tech III Year II Semester Examinations, August - 2022

FINITE ELEMENT METHODS

(Common to ME, MCT)

Time: 3 Hours

Max.Marks:75

Answer any five questions
All questions carry equal marks

1. An axial load $P = 385 \text{ kN}$ is applied to the composite block as shown in figure 1. Determine the stress in each material. [15]

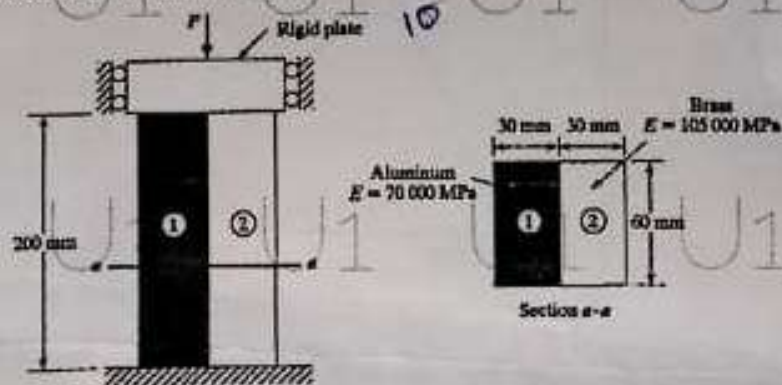


Figure 1

2. Find the temperature distribution in the stepped fin shown in figure 2 using two finite elements. [15]

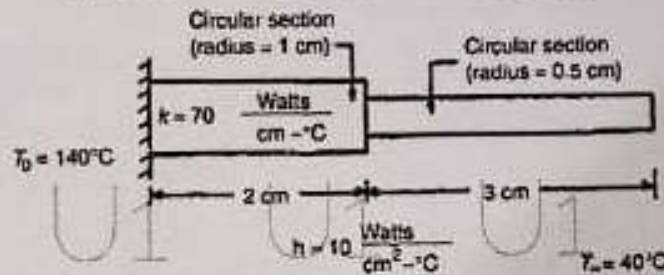


Figure 2

3.a) Differentiate between a bar element and a truss element.

b) Using variational approach derive element stiffness matrix of (i) bar element (ii) plane truss element. [6+9]

4. Explain the elimination method and penalty method of imposing boundary conditions. Comment on the two methods. [15]

- 5.a) What is Constant Strain Triangle in structural analysis? How do stresses vary within the constant strain triangle element?
- b) What are axi-symmetric solids? Mention their applications. What are the conditions for a problem to be axi-symmetric? [7+8]

6. For the CST element shown in figure 3, assemble strain-displacement matrix. Take, $t = 20 \text{ mm}$, $E = 2 \times 10^5 \text{ N/mm}^2$. [15]

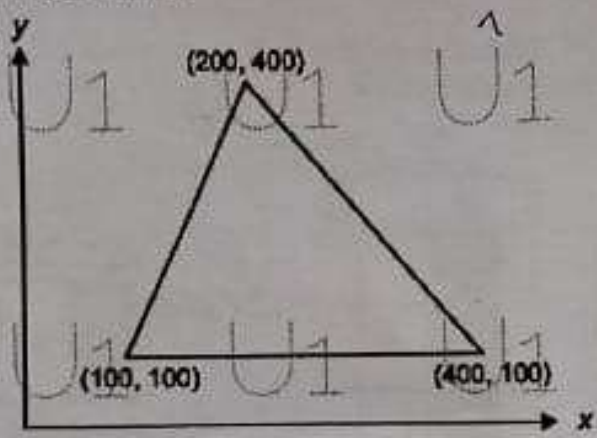


Figure 3

7. Discuss Galerkins approach for one dimensional heat transfer in fins. [15]
8. Explain in detail about the Eigen values and Eigen vectors evaluation. [15]

—oo0oo—